

Name:

Class:

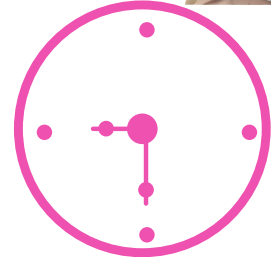
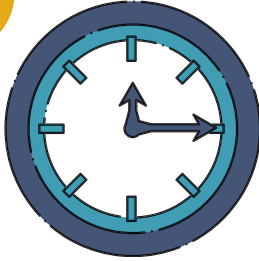
Date:

Score:



TELLING THE TIME


Look at the clocks. Write the time.



1

2




3



4

5


6



7

8

9



10

11

12

Copyright © Concordhomework.co.uk. All rights reserved.

Name:

Class:

Date:

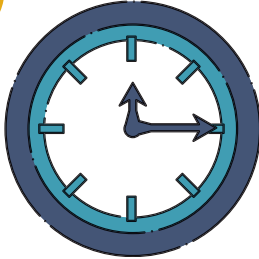
Score:



TELLING THE TIME

Answer key

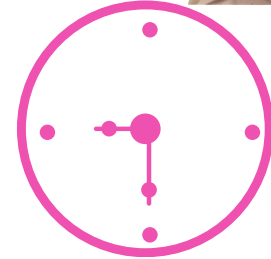
Look at the clocks. Write the time.



1 It's quarter past twelve.
(It's twelve fifteen)




2 It's twenty past twelve.
(It's twelve twenty)



3 It's half past nine.
(It's nine thirty)



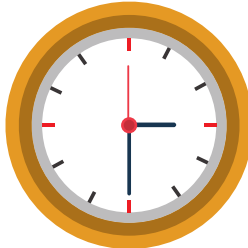
4 It's ten past ten.
(It's ten ten)




5 It's three o'clock.




6 It's five to three.
(It's two fifty-five)



7 It's half past three.
(It's three thirty)



8 It's ten to three.
(It's two fifty)



9 It's five past ten.
(It's ten five)



10 It's quarter to twelve.
(It's eleven forty-five)



11 It's three past three.
(It's three three)



12 It's ten to six.
(It's five fifty)